

### 7F Construct a Hexagon

**Construct a Hexagon that incorporates the given segment as one of the sides. Construct the inscribing circle around the hexagon.**

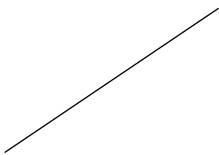
1)




2)



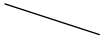
3)



4)



5)



6)



7)



8)



# Answers to 7F Construct a Hexagon

