

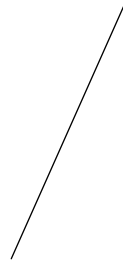
### 7A - Copy a segment and an angle :)

**Construct a line segment congruent to each given line segment.**

1)



2)



3)




4)



5)




6)




**Construct a line segment whose length is equal to the sum of the lengths of the given line segments.**

7)




8)




**Construct a line segment whose length is equal to the difference of the lengths of the given line segments.**

9)

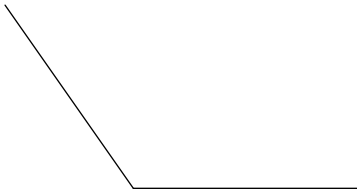


10)

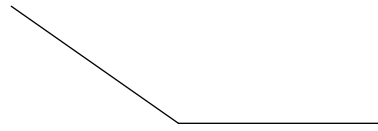


**Construct a copy of each angle given.**

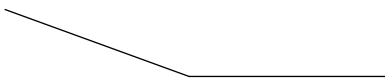
11)



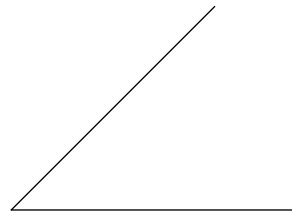
12)



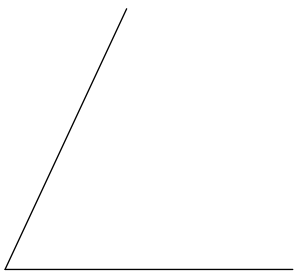
13)



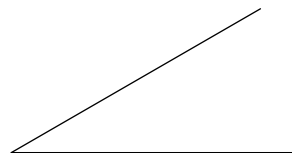
14)



15)



16)



# Answers to 7A - Copy a segment and an angle :)

