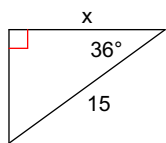


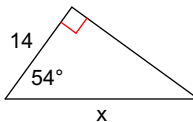
11.2 Finding a Missing Side

Find the missing side. Round to the nearest tenth.

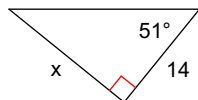
1)



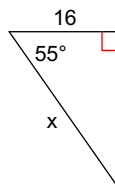
2)



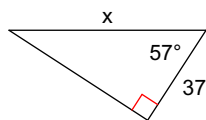
3)



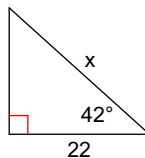
4)



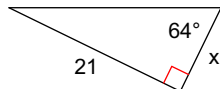
5)



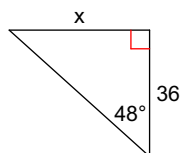
6)



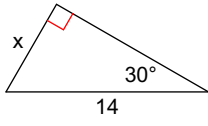
7)



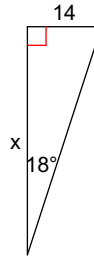
8)



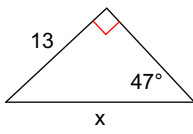
9)



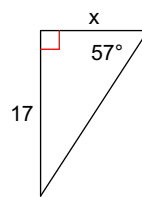
10)



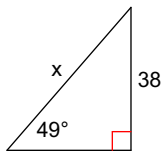
11)



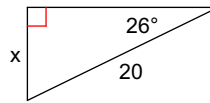
12)



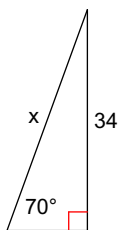
13)



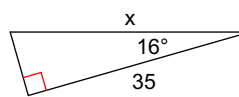
14)



15)



16)



Answers to 11.2 Finding a Missing Side

1) 12.1
5) 67.9
9) 7.0
13) 50.4

2) 23.8
6) 29.6
10) 43.1
14) 8.8

3) 17.3
7) 10.2
11) 17.8
15) 36.2

4) 27.9
8) 40.0
12) 11.0
16) 36.4