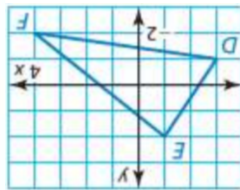
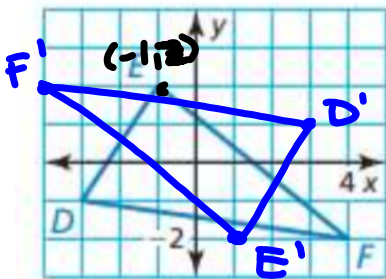


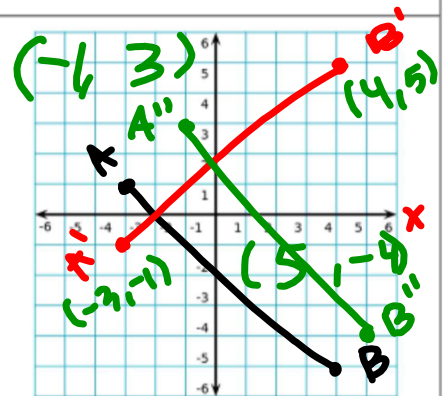
# Grab a Week #8 Packet Bell Ringer

Monday 1/13

Rotate the polygon 180 degrees.



Graph the segment AB with endpoints  $A(-3, 1)$  and  $B(4, -5)$ . Reflect the segment over the x-axis, then rotate 270 degrees.



11.3 online hw due today  
11.4 online hw due tomorrow

\* Ch 10 Test Retake due Wednesday  
\* Week #7 Packet due Wednesday

→ Ch 11 Test Wednesday!

Ch 11 Review  
pg 578-580 #s 1-6, 9-24  
Use a whiteboard if you need...  
due Wednesday

