

Constructing Parallel lines through a given point

Construct a line parallel to the given line and passes through the given point.


1. 



2. 




3. 




4. 



5. 



6. 



7. 




8. 



9.

.



10.

.




11.

.



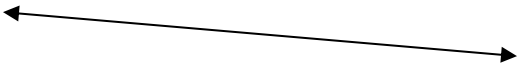
12.

.



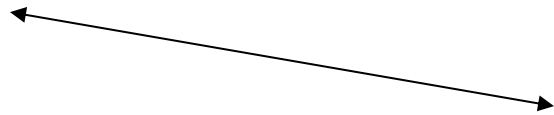
13.

.



14.

.



15.

.



16.

.

